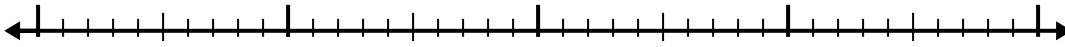




Use the number line to solve each problem.

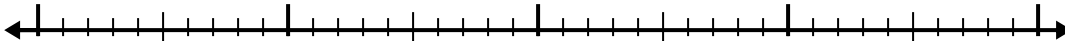
Answers

1) $3.4 - 1.7 =$




1. _____

2) $5.8 - 2.8 =$



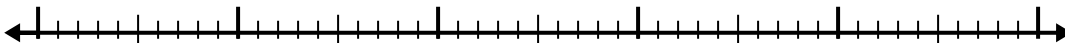
2. _____

3) $5.2 - 3.7 =$



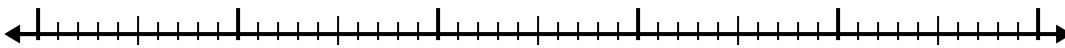
3. _____

4) $6.2 - 3.8 =$



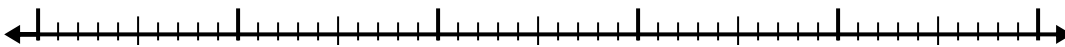
4. _____

5) $4.9 - 2.6 =$



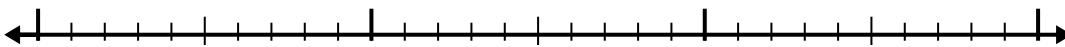
5. _____

6) $3.3 - 2.1 =$



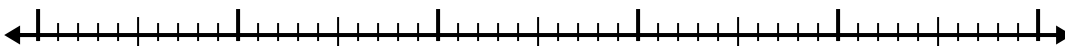
6. _____

7) $6.6 - 1.4 =$




7. _____

8) $9.4 - 3.4 =$




8. _____

9) $6.4 - 3.3 =$



9. _____

10) $12 - 3.7 =$

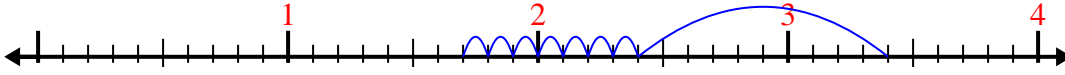


10. _____

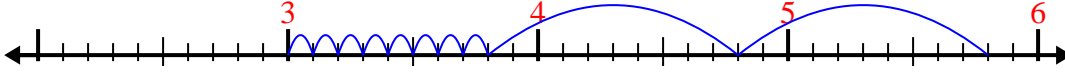


Use the number line to solve each problem.

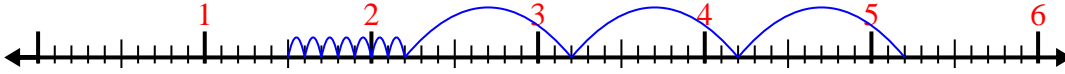
1) $3.4 - 1.7 =$



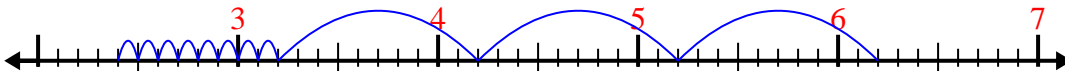
2) $5.8 - 2.8 =$



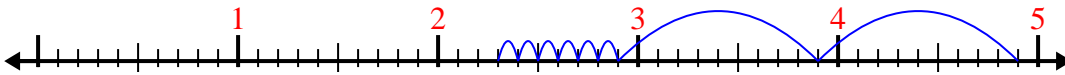
3) $5.2 - 3.7 =$



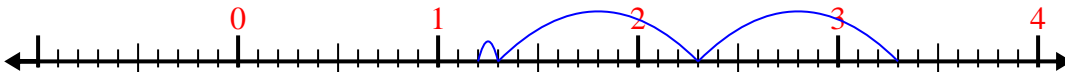
4) $6.2 - 3.8 =$



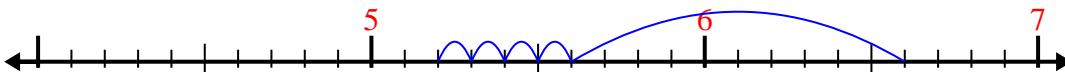
5) $4.9 - 2.6 =$



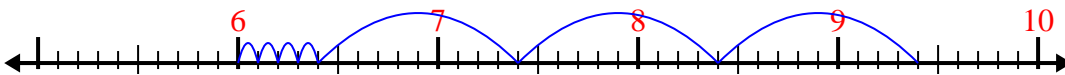
6) $3.3 - 2.1 =$



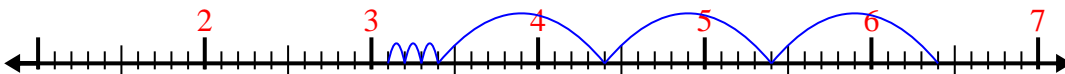
7) $6.6 - 1.4 =$



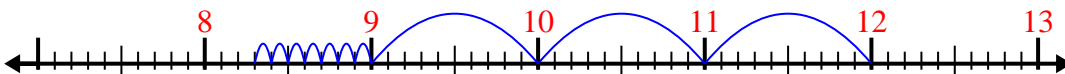
8) $9.4 - 3.4 =$



9) $6.4 - 3.3 =$



10) $12 - 3.7 =$



Answers

1. 1.7

2. 3

3. 1.5

4. 2.4

5. 2.3

6. 1.2

7. 5.2

8. 6

9. 3.1

10. 8.3